


# Shamrock Measurements

(St. Patrick's Day - March 17)

Use a ruler and measure each shamrock's width. Record both inches and centimeters.

1.




\_\_\_\_\_ inches  
\_\_\_\_\_ centimeters

2.



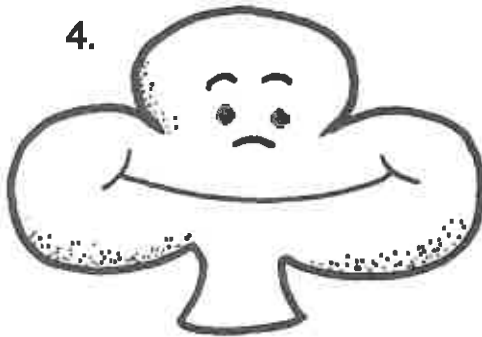
\_\_\_\_\_ inches  
\_\_\_\_\_ centimeters

3.




\_\_\_\_\_ inches  
\_\_\_\_\_ centimeters

4.



\_\_\_\_\_ inches  
\_\_\_\_\_ centimeters

5.




\_\_\_\_\_ inches  
\_\_\_\_\_ centimeters

6.



\_\_\_\_\_ inches  
\_\_\_\_\_ centimeters

7.



\_\_\_\_\_ inches  
\_\_\_\_\_ centimeters